



General Certificate of Secondary Education  
November 2025

Centre Number

--	--	--	--	--

Candidate Number

--	--	--	--	--

# Mathematics

Unit M2  
(With calculator)  
Foundation Tier



[GMC21]

\*GMC21\*

**TUESDAY 18 NOVEMBER, 9.15am–11.00am**

## TIME

1 hour 45 minutes.

## INSTRUCTIONS TO CANDIDATES

Write your Centre Number and Candidate Number in the spaces provided at the top of this page.

**You must answer the questions in the spaces provided.**

**Do not write outside the boxed area on each page or on blank pages.**

Complete in black ink only. **Do not write with a gel pen.**

Questions which require drawing or sketching should be completed using an HB pencil. All working **must** be clearly shown in the spaces provided. Marks may be awarded for partially correct solutions.

You **may** use a calculator for this paper.

Answer **all thirty-one** questions.

## INFORMATION FOR CANDIDATES

The total mark for this paper is 100.

Figures in brackets printed down the right-hand side of pages indicate the marks awarded to each question or part question.

You should have a calculator, ruler, compasses and a protractor.

The Formula Sheet is on page 2.

15153



\*32GMC2101\*

# Formula Sheet

$$\text{Area of trapezium} = \frac{1}{2}(a + b)h$$



$$\text{Volume of prism} = \text{area of cross section} \times \text{length}$$



1 Steve's earnings were £2700 per month.

His pension contribution was 8% of his earnings.

(a) How much was Steve's pension contribution per month?

Answer £ \_\_\_\_\_ [2]

His employer also made a pension contribution of 3% of Steve's earnings.

(b) How much would the **total** pension contributions be each **year**?

Answer £ \_\_\_\_\_ [2]

[Turn over



2 Minibuses can transport 15 passengers at a time.

There are 110 passengers waiting in a queue.

(a) What is the **minimum** number of minibuses needed to transport everyone in the queue?

Answer \_\_\_\_\_ [2]

(b) Assuming that all other minibuses were full, how many passengers will be in the last minibus?

Answer \_\_\_\_\_ [1]

3 Look at these numbers.

2835      4283

How much more is the digit 8 worth in 2835 than in 4283?

Answer \_\_\_\_\_ [2]



4 When ordering posts for a double-sided fence, a joiner uses the rule

*“Divide the number of panels by 2 and then add 1”*

(a) How many posts are needed for a double-sided fence with 16 panels?

Answer \_\_\_\_\_ [1]


(b) If the joiner ordered 11 posts, how many panels does he need?

Answer \_\_\_\_\_ [2]

[Turn over



5 (a) Circle the shape that has exactly two lines of symmetry.



[1]

(b) Calculate the size of angle  $q$ .

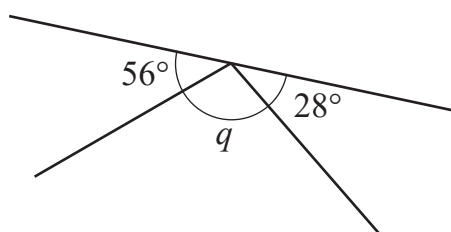
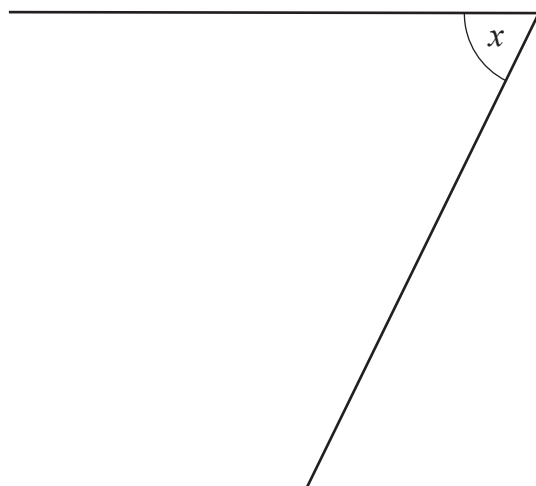


diagram not drawn accurately

Answer \_\_\_\_\_ ° [2]

(c) Use a **protractor** to measure the size of angle  $x$ .



Answer \_\_\_\_\_ ° [1]



6 Mary is a chef in a burger bar.

She has 8.3 kg of burger mix.

Mary uses 125 g of burger mix in each burger.

How many burgers can Mary make?

Answer \_\_\_\_\_ [2]



- 7 The number of visitors to a tourist attraction over a six-year period is given in the table.

Year	2015	2016	2017	2018	2019	2020
Number of visitors	7910	6920	9430	38 500	34 050	6150

- (a) What is the **range** of the number of visitors over the six-year period?

Answer \_\_\_\_\_ visitors [1]

- (b) Rick has started calculating the **mean** number of visitors over the six-year period.

Complete Step 2 and write down the mean.

Step 1:  $7910 + 6920 + 9430 + 38\,500 + 34\,050 + 6150 = 102\,960$

Step 2:

Answer The mean is \_\_\_\_\_ visitors [2]

- (c) There were 15 000 visitors in 2021

The new mean, over the seven years, is calculated.

Which of the following statements is true?

Circle your answer.

**the mean increases**

**the mean decreases**

**the mean stays the same**

[1]



8 The scores of 12 students in a test are

44      31      77      40      16      46  
79      68      51      20      50      48

(a) What is the median test score?

Answer \_\_\_\_\_ [2]

Naomi designs this tally and frequency table to put the scores into groups.

Test score	Tally	Frequency
20–29		
30–39		
40–49		
50–59		
60–69		
70–79		

(b) Write down one criticism of Naomi's tally and frequency table.

Answer \_\_\_\_\_  
\_\_\_\_\_ [1]

[Turn over



9 Work out the value of  $2^3 + 3^2$

Answer \_\_\_\_\_ [2]

10 Kasper wants to set a new 4-digit passcode for his phone.

He wants the first 2 digits to be a prime number between 20 and 30

He wants the last 2 digits to be a square number between 20 and 30

Write down both passcodes that he could use.

Answer \_\_\_\_\_ and \_\_\_\_\_ [2]

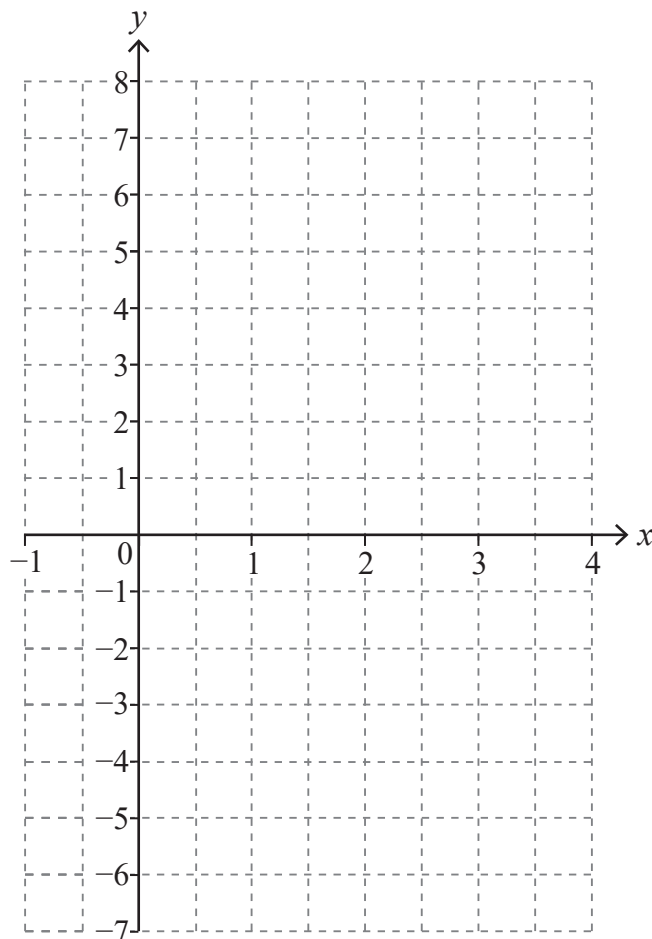


11 (a) (i) Complete the table for  $y = 3x - 2$

$x$	-1	0	1	2	3
$y$	-5				7

[1]

(ii) On the grid below, draw the graph of  $y = 3x - 2$



[2]

(b) Solve the equation  $3x - 2 = 5.5$

Answer  $x =$  \_\_\_\_\_ [2]

[Turn over



12 (a) Claire bought 350 bonds at a cost of £4.20 per bond.

Later she bought another 200 bonds, but cannot remember how much she paid per bond.

The total amount she paid for all the bonds was £2500

Calculate how much Claire paid per bond when she bought the 200 bonds.

**Show your working out clearly.**

Answer £ \_\_\_\_\_ [4]

(b) The “return on investment” value is the percentage profit Claire made.

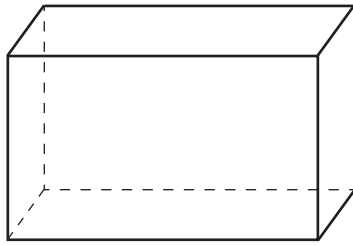
Claire sold the bonds a year later for a total of £2850

What was her “return on investment” value?

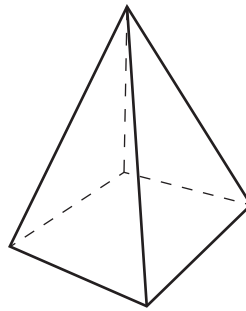
Answer \_\_\_\_\_ % [2]



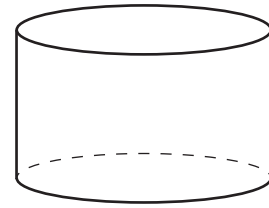
13



Shape A



Shape B



Shape C

(a) What is the mathematical name of Shape A?

Answer \_\_\_\_\_ [1]

(b) Complete the sentences.

(i) Shape B has \_\_\_\_\_ edges. [1]

(ii) Shape B has \_\_\_\_\_ vertices. [1]

(c) Complete the sentence with the correct shape.

A net of Shape C would consist of 2 circles and a

\_\_\_\_\_ . [1]

[Turn over



14 The six angles in two different triangles are listed in descending order.

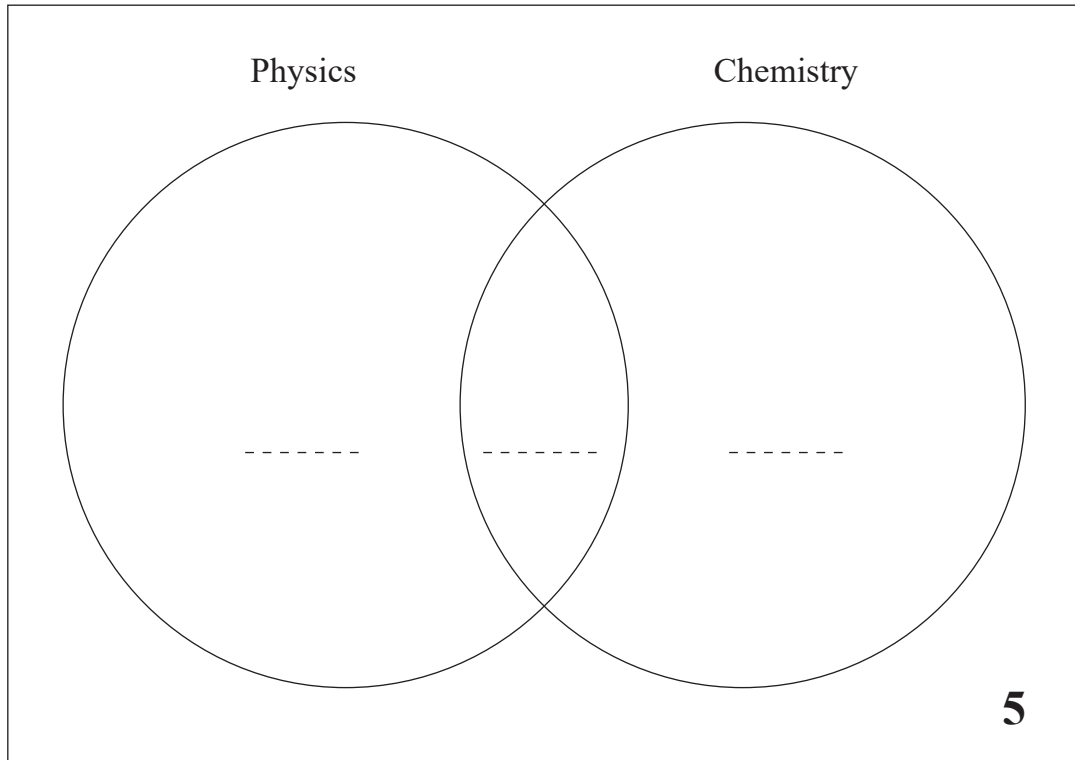
The first four angles are  $120^\circ$   $80^\circ$   $72^\circ$   $40^\circ$

Find the size of the **smallest** angle that would complete the list.

Answer \_\_\_\_\_  $^\circ$  [3]



15



The Venn diagram represents 50 students.

12 students study Physics but not Chemistry.

28 students study Physics.

Complete the Venn diagram to find the number of students who study Chemistry but not Physics.

Answer \_\_\_\_\_ [3]

[Turn over



16 Pupils were asked to vote for how much homework they should get each week.

85 voted to have homework every night

105 voted not to have homework at all

110 voted to have homework on three nights per week

What percentage of pupils voted not to have homework at all?

Answer \_\_\_\_\_ % [2]

17 Use your calculator to find the value of

$$\frac{47.8 - 4.5^2}{15.6 + 4.85}$$

Round your answer to 2 decimal places.

Answer \_\_\_\_\_ [2]



18 At a sports match

$\frac{5}{8}$  of the crowd supported the home team

$\frac{1}{3}$  of the crowd supported the away team

The rest of the crowd did not support either team.

What fraction of the crowd did not support either team?

Answer \_\_\_\_\_ [2]

[Turn over



19 A property developer bought a house for £84 000

He sold the house, making a profit of 12%

How much did he sell the house for?

Answer £ \_\_\_\_\_ [3]



20 A quadrilateral has angles as shown in the diagram below.

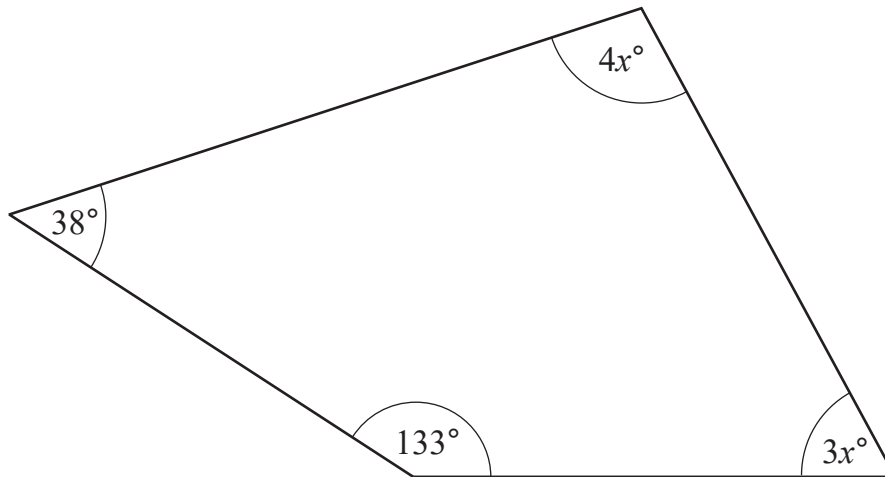


diagram  
not drawn  
accurately

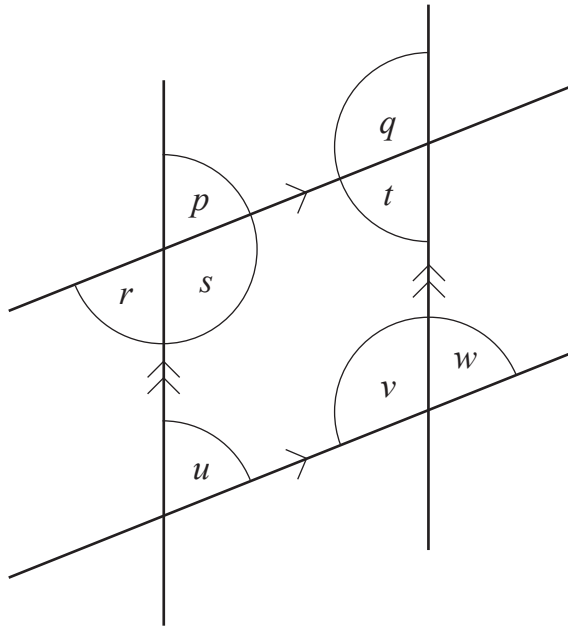
Find the value of  $x$

Show your working out clearly.

Answer  $x =$  \_\_\_\_\_ [4]

[Turn over





- (a) Name an angle alternate to angle  $r$       Answer \_\_\_\_\_ [1]
- (b) Name an angle corresponding to angle  $u$       Answer \_\_\_\_\_ [1]
- (c) What is the sum of angle  $t$  and angle  $v$ ?      Answer \_\_\_\_\_  $^{\circ}$  [1]



22 Barbara wants to investigate the number of hours adults spend on social media.

She gives a questionnaire to a random sample of 60 members of a pensioners' club.

One of the questions is shown below.

How many hours do you spend on social media?	
1 – 5	<input type="checkbox"/>
5 – 10	<input type="checkbox"/>
10 – 20	<input type="checkbox"/>

(a) Give **one** criticism of the **sample** she has selected.

Answer \_\_\_\_\_  
\_\_\_\_\_ [1]

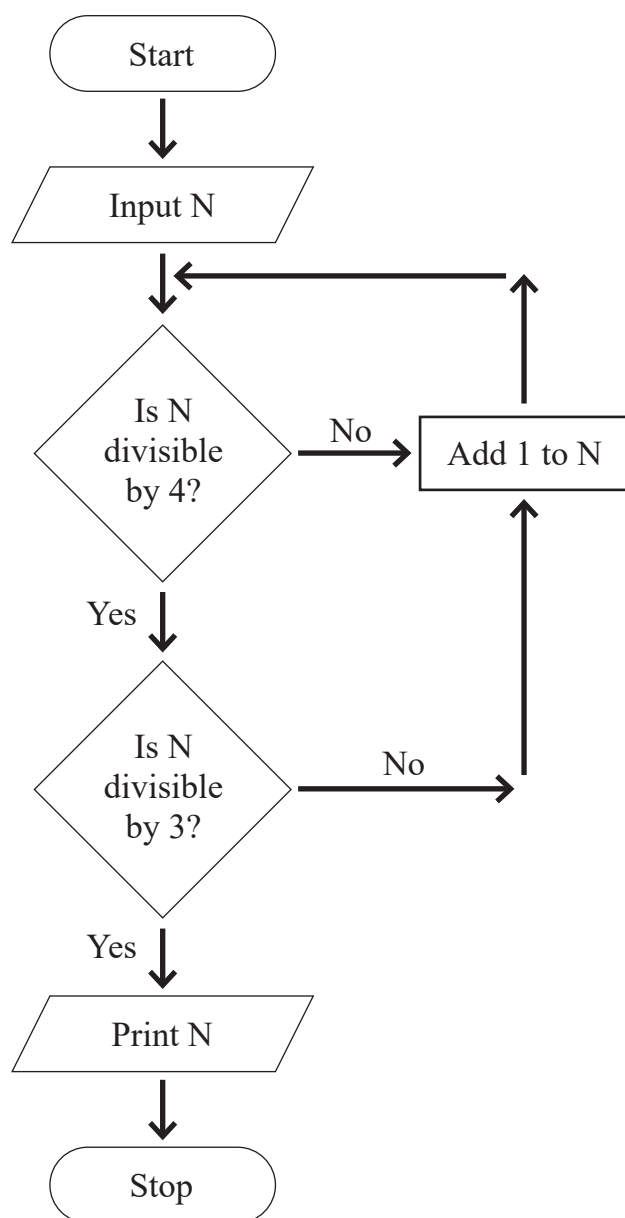
(b) Give **two** criticisms of the **questionnaire**.

1 \_\_\_\_\_  
\_\_\_\_\_  
2 \_\_\_\_\_  
\_\_\_\_\_ [2]

[Turn over



23 (a) Starting with  $N = 31$ , use the flow chart to find the number printed.

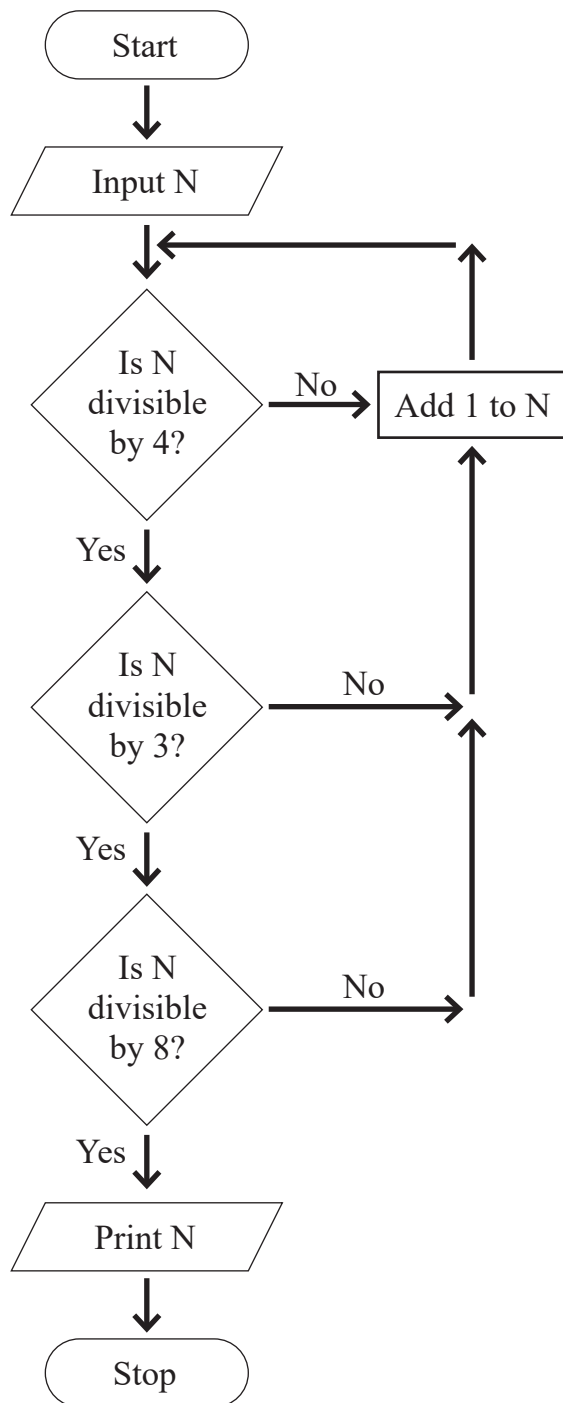


Answer \_\_\_\_\_ [2]



(b) A third decision box is added.

Starting with  $N = 31$ , find the number printed now.

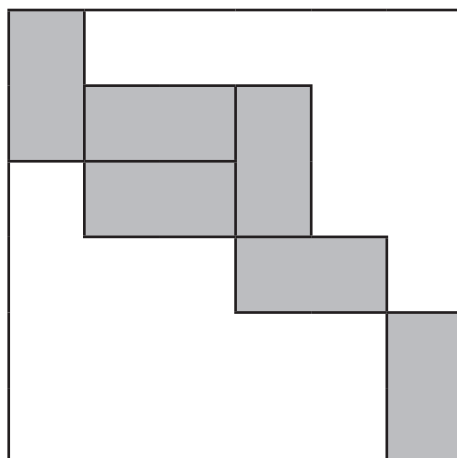


Answer \_\_\_\_\_ [1]

[Turn over



24 Six equal rectangles are placed inside a square of side 60 cm as shown in the diagram.



Calculate the area of the **unshaded** part of the square.

**Show your working out clearly.**

Answer \_\_\_\_\_ cm<sup>2</sup> [4]



25 In March, a household electricity bill was £340

In June, the electricity bill was 15% less than in March.

In September, the electricity bill was 15% more than in June.

How much **less** was the bill in September than the bill in March?

Answer £ \_\_\_\_\_ [4]

26 150 expressed as a product of prime factors is  $2 \times 3 \times 5^2$

What is the smallest number that 150 can be multiplied by to give a **square** number?

Answer \_\_\_\_\_ [2]

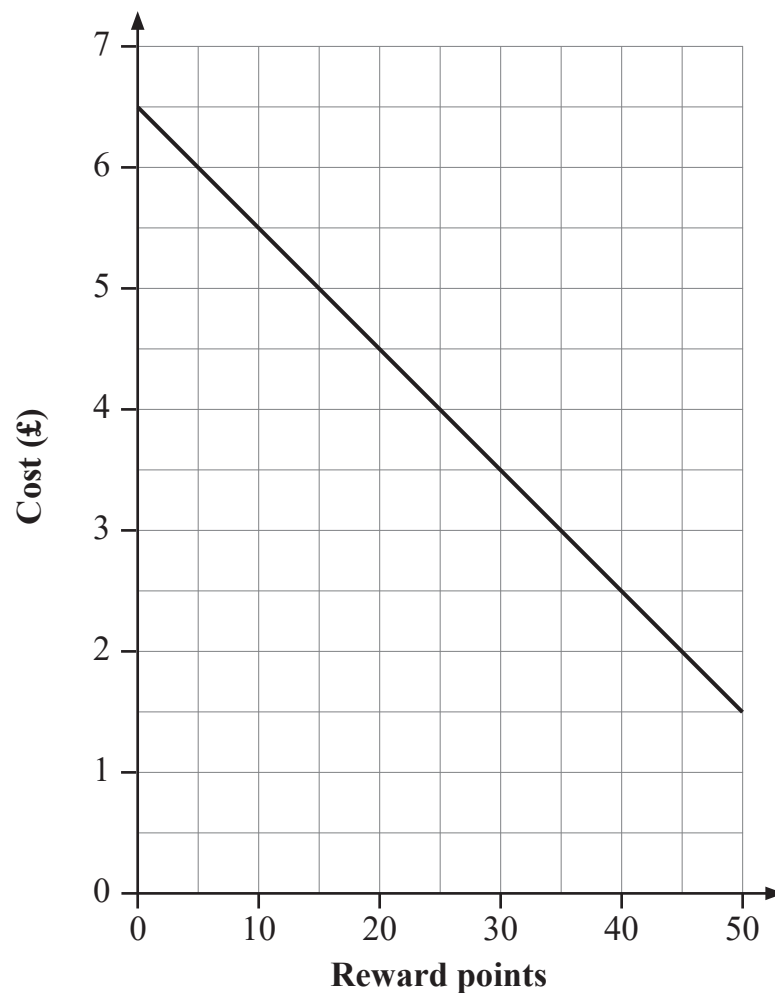
[Turn over



27 A supermarket offers discounts for customers who have collected reward points.

The graph shows the price of a tin of biscuits with reward points.

Customers can use a maximum of 50 reward points for each tin of biscuits.



(a) How much does a tin of biscuits cost with no reward points?

Answer £ \_\_\_\_\_ [1]



(b) How much is each reward point worth in pence?

Answer \_\_\_\_\_ p [2]

(c) A customer wants to buy two tins of biscuits.

They have 85 reward points.

How much will they have to pay in total?

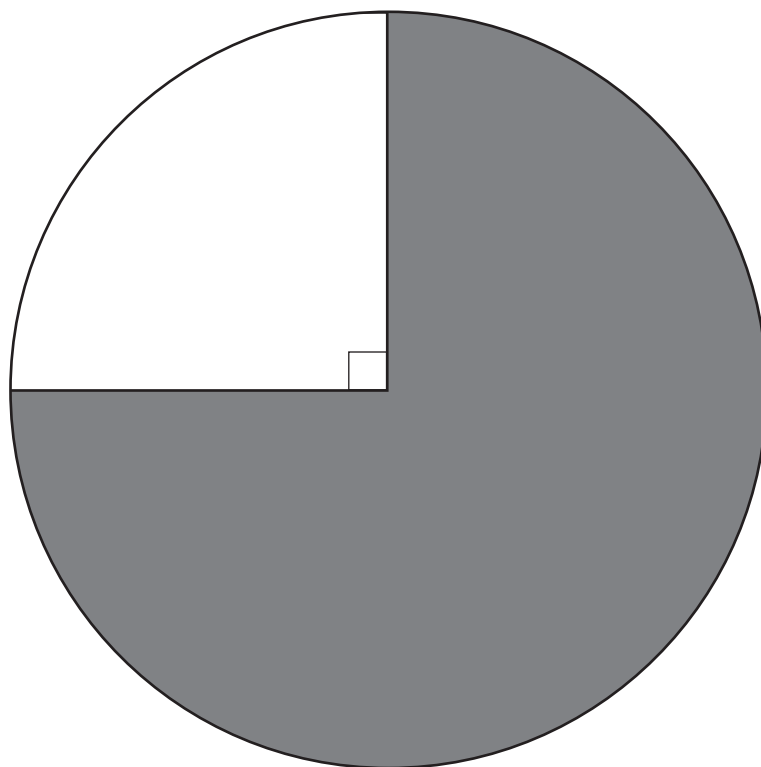
Answer £ \_\_\_\_\_ [2]

[Turn over



28 The circle below has a diameter of 8 cm.

Calculate the shaded area.



Answer \_\_\_\_\_ cm<sup>2</sup> [3]



29 Calculate the perimeter of the shape shown.

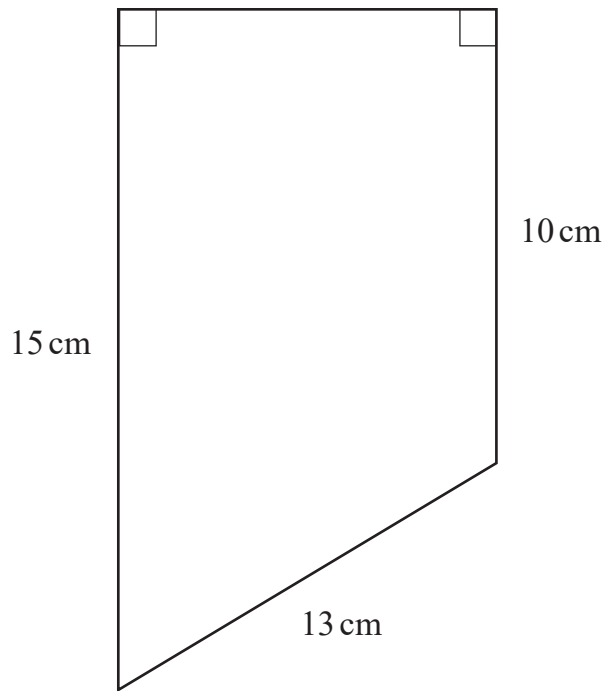


diagram  
not drawn  
accurately

Show your working out clearly.

Answer \_\_\_\_\_ cm [4]

[Turn over



30 The grouped frequency table shows the journey times to school for pupils.

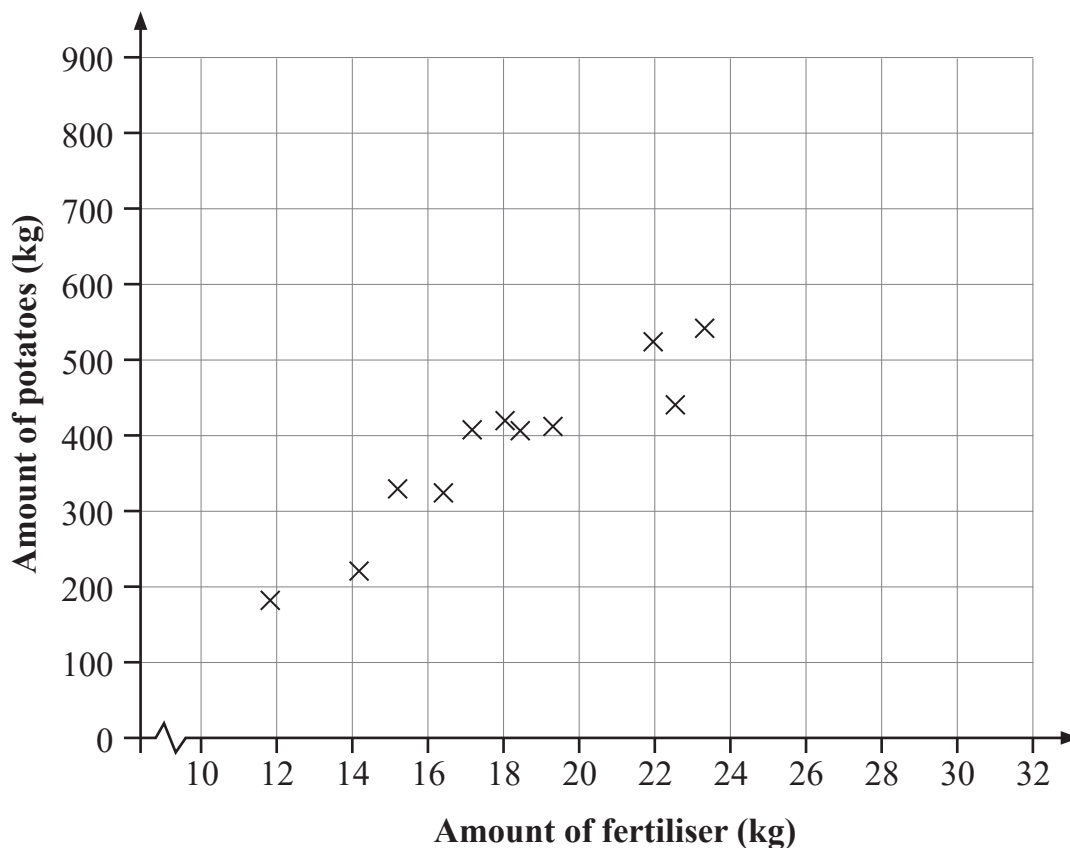
Time $t$ (minutes)	Frequency		
$10 \leq t < 20$	13		
$20 \leq t < 30$	23		
$30 \leq t < 40$	9		
$40 \leq t < 50$	5		

Calculate an estimate for the mean journey time to school for pupils.

Answer \_\_\_\_\_ minutes [4]



- 31 The scatter graph shows positive correlation between the amount of potatoes produced (kg) and the amount of fertiliser used (kg).



Zara suggests drawing a line of best fit to estimate the amount of potatoes produced when the amount of fertiliser used is 32 kg.

- (a) Give a statistical reason why this would not be recommended.

\_\_\_\_\_ [1]

- (b) Suggest an amount of fertiliser for which a line of best fit could be used.

Answer \_\_\_\_\_ kg [1]

**THIS IS THE END OF THE QUESTION PAPER**



**SOURCES:**

All images © CCEA unless stated.

**DO NOT WRITE ON THIS PAGE**

For Examiner's use only	
Question Number	Marks
1	
2	
3	
4	
5	
6	
7	
8	
9	
10	
11	
12	
13	
14	
15	
16	
17	
18	
19	
20	
21	
22	
23	
24	
25	
26	
27	
28	
29	
30	
31	

<b>Total Marks</b>	
--------------------	--

Examiner Number

Permission to reproduce all copyright material has been applied for.  
In some cases, efforts to contact copyright holders may have been unsuccessful and CCEA will be happy to rectify any omissions of acknowledgement in future if notified.

15153/7



\*32GMC2132\*